





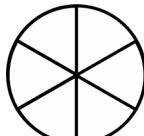
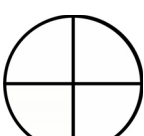

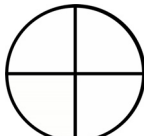


Fractions

31. Divide these shapes. Colour the part you are asked to colour.

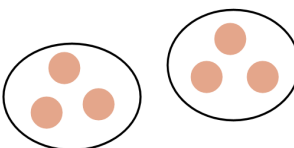

<p>a. </p> <p>Divide this into thirds. Colour $\frac{2}{3}$.</p>	<p>b. </p> <p>Divide this into halves. Colour $\frac{1}{2}$.</p>	<p>c. </p> <p>Divide this into halves. Colour $\frac{2}{2}$.</p>	<p>d. </p> <p>Divide this into fourths. Colour $\frac{3}{4}$.</p>
--	--	---	---

32. Colour in the given fraction. Compare and write $<$, $>$ or $=$ between the fractions.

<p>a.  $\frac{1}{2}$</p> <p> $\frac{2}{5}$</p>	<p>b.  $\frac{4}{6}$</p> <p> $\frac{3}{4}$</p>	<p>c.  $\frac{2}{3}$</p> <p> $\frac{2}{4}$</p>
--	--	--

The Concept of Multiplication

33. Write a multiplication sentence for each picture.

<p>a. </p> <p>a. _____ \times _____ = _____</p>	<p>b. </p> <p>b. _____ \times _____ = _____</p>
---	--

34. Write a multiplication for each addition, and solve.

<p>a. $5 + 5 + 5$</p> <p>_____ \times _____ = _____</p>	<p>b. $4 + 4 + 4 + 4 + 4$</p> <p>_____ \times _____ = _____</p>
---	---

35. Solve.

<p>a. $2 \times 5 =$ _____</p>	<p>b. $3 \times 3 =$ _____</p>	<p>c. $3 \times 10 =$ _____</p>
---	---	--