









Completing the Next Hundred

1. You need 10 ten-pillars to make a new hundred. Draw in the missing ten-pillars, and complete the next whole hundred.

 + _____ =  a. 160 + _____ = 200	 + _____ =  b. 250 + _____ = 300
 + _____ =  c. 180 + _____ = 200	 + _____ =  d. 220 + _____ = 300

2. Complete the next hundred. COMPARE the problems in each box.

a. 80 + _____ = 100 280 + _____ = 300 680 + _____ = _____	b. 30 + _____ = 100 330 + _____ = _____ 530 + _____ = _____	c. 40 + _____ = _____ 740 + _____ = _____ 940 + _____ = 1000
---	---	--

3. Complete the next hundred. Think of a helping problem where you complete just 100.

a. 540 + _____ = 600 (40 + _____ = 100)	b. 250 + _____ = 300 (50 + _____ = 100)	c. 630 + _____ = 700 (30 + _____ = 100)
d. 120 + _____ = _____	e. 440 + _____ = _____	f. 970 + _____ = _____

4. Solve each subtraction by thinking of the difference or of the “how many more” addition.

a. 500 - 440 = _____ (440 + _____ = 500)	b. 800 - 710 = _____ (difference of 800 and 710)	c. 1000 - 960 = _____ (960 + _____ = 1000)
---	---	---