
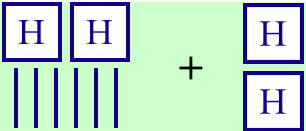
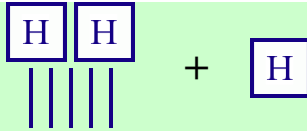
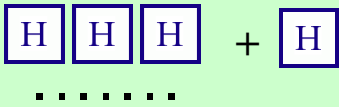
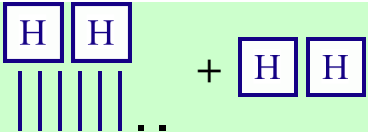
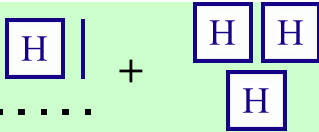


Add and Subtract Whole Hundreds

1. A dot is one, a stick is a ten, and a square is a hundred. Write the addition sentences. Add in columns as well. Hundreds will go in their own column!

<p>a.</p> <div style="text-align: center;">  </div> <table style="margin-left: auto; margin-right: auto;"> <tr><td></td><td>2</td><td>0</td><td>0</td></tr> <tr><td>+</td><td>1</td><td>0</td><td>0</td></tr> <tr><td colspan="4"><hr/></td></tr> <tr><td></td><td></td><td></td><td></td></tr> </table>		2	0	0	+	1	0	0	<hr/>								<p>b.</p> <div style="text-align: center;">  </div> <table style="margin-left: auto; margin-right: auto;"> <tr><td></td><td></td><td></td><td></td></tr> <tr><td></td><td></td><td></td><td></td></tr> <tr><td>+</td><td></td><td></td><td></td></tr> <tr><td colspan="4"><hr/></td></tr> <tr><td></td><td></td><td></td><td></td></tr> </table>									+				<hr/>								<p>c.</p> <div style="text-align: center;">  </div> <table style="margin-left: auto; margin-right: auto;"> <tr><td></td><td></td><td></td><td></td></tr> <tr><td></td><td></td><td></td><td></td></tr> <tr><td>+</td><td></td><td></td><td></td></tr> <tr><td colspan="4"><hr/></td></tr> <tr><td></td><td></td><td></td><td></td></tr> </table>									+				<hr/>											
	2	0	0																																																											
+	1	0	0																																																											
<hr/>																																																														
+																																																														
<hr/>																																																														
+																																																														
<hr/>																																																														
<p>d.</p> <div style="text-align: center;">  </div> <table style="margin-left: auto; margin-right: auto;"> <tr><td></td><td></td><td></td><td></td></tr> <tr><td></td><td></td><td></td><td></td></tr> <tr><td>+</td><td></td><td></td><td></td></tr> <tr><td colspan="4"><hr/></td></tr> <tr><td></td><td></td><td></td><td></td></tr> </table>									+				<hr/>								<p>e.</p> <div style="text-align: center;">  </div> <table style="margin-left: auto; margin-right: auto;"> <tr><td></td><td></td><td></td><td></td></tr> <tr><td></td><td></td><td></td><td></td></tr> <tr><td>+</td><td></td><td></td><td></td></tr> <tr><td colspan="4"><hr/></td></tr> <tr><td></td><td></td><td></td><td></td></tr> </table>									+				<hr/>								<p>f.</p> <div style="text-align: center;">  </div> <table style="margin-left: auto; margin-right: auto;"> <tr><td></td><td></td><td></td><td></td></tr> <tr><td></td><td></td><td></td><td></td></tr> <tr><td>+</td><td></td><td></td><td></td></tr> <tr><td colspan="4"><hr/></td></tr> <tr><td></td><td></td><td></td><td></td></tr> </table>									+				<hr/>							
+																																																														
<hr/>																																																														
+																																																														
<hr/>																																																														
+																																																														
<hr/>																																																														

$$\underline{5}14 + \underline{2}00 = ??$$

Add mentally 500 and 200, or the whole hundreds.

That is 700. The answer is 714.

Only the hundreds digit will change! The “14” does not change.

2. Add whole hundreds.

<p style="text-align: center;">a.</p> <p>615 + 200 = _____</p> <p>278 + 300 = _____</p>	<p style="text-align: center;">b.</p> <p>409 + 400 = _____</p> <p>563 + 100 = _____</p>	<p style="text-align: center;">c.</p> <p>722 + 200 = _____</p> <p>194 + 500 = _____</p>
--	--	--