




Adding Fractions and Mixed Numbers 1

1. Add the fractions. You can shade parts in the picture, if you need help.

a. $\frac{2}{5} + \frac{1}{5} =$ 	b. $\frac{1}{7} + \frac{2}{7} + \frac{3}{7} =$ 	c. $\frac{4}{12} + \frac{7}{12} =$ 
---------------------------------------------------------------------------------------------------------------------------	------------------------------------------------------------------------------------------------------------------------------------------	-------------------------------------------------------------------------------------------------------------------------------

2. This is a fraction strip. Write the whole numbers from 0 to 5 under the bolded black lines.



What addition sentence do the shaded parts illustrate on the fraction strip?

3. Add and give your answer as a mixed number. Shade parts with different colors.



a. $\frac{3}{5} + \frac{4}{5} =$



b. $1 \frac{2}{5} + \frac{4}{5} =$



c. $\frac{7}{10} + \frac{6}{10} =$



d. $1 \frac{3}{7} + \frac{6}{7} =$

e. $\frac{4}{6} + \frac{3}{6} =$

f. $\frac{2}{4} + \frac{3}{4} =$

g. $\frac{8}{10} + \frac{6}{10} =$

h. $\frac{7}{12} + \frac{7}{12} =$

4. Add. You can use the fraction strips to help, or draw more of your own.

a. $2 \frac{3}{5} + \frac{4}{5} =$



b. $1 \frac{5}{6} + \frac{3}{6} =$



c. $1 \frac{3}{7} + 1 \frac{4}{7} =$



d. $1 \frac{5}{10} + 1 \frac{6}{10} =$



e. $\frac{4}{5} + 1 \frac{2}{5} =$

f. $1 \frac{4}{5} + \frac{7}{5} =$

g. $1 \frac{4}{7} + \frac{8}{7} =$

h. $1 \frac{7}{10} + \frac{7}{10} =$

i. $1 \frac{6}{10} + \frac{13}{10} =$