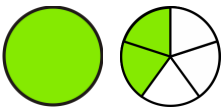
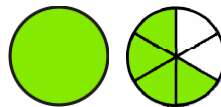
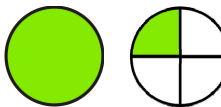

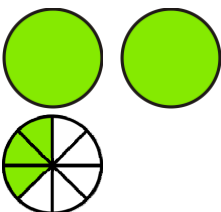
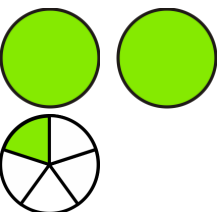
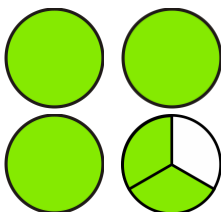
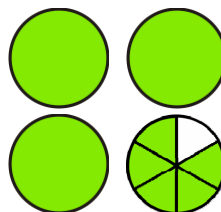


# Mixed Numbers

1. Write what mixed numbers the pictures illustrate.

<p>a. </p>	<p>b. </p>	<p>c. </p>	<p>d. </p>
<p>e. </p>	<p>f. </p>	<p>g. </p>	<p>h. </p>

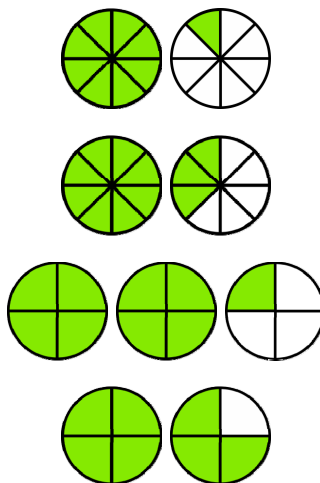
2. Find matching pairs.

$1 \frac{3}{4}$

$1 \frac{1}{8}$

$2 \frac{1}{4}$

$1 \frac{3}{8}$



$\frac{9}{4}$

$\frac{7}{4}$

$\frac{11}{8}$

$\frac{9}{8}$

3. Draw pictures to illustrate these mixed numbers.

a.  $1 \frac{1}{2}$

b.  $2 \frac{2}{3}$

c.  $2 \frac{3}{4}$