


Division as Making Groups


1. Make a division sentence.

a. Divide 10 rams into groups of two. How many groups?




_____ ÷ _____ = _____

b. Divide _____ camels into groups of four. How many groups?



_____ ÷ _____ = _____


c. Divide _____ apples into groups of six. How many groups?



_____ ÷ _____ = _____


2. Make groups by circling dots and write a division sentence.

a. Make groups of 4




_____ ÷ 4 = _____

b. Make groups of 2




_____ ÷ 2 = _____

c. Make groups of 6



_____ ÷ 6 = _____

d. Make groups of 3



_____ ÷ 3 = _____

3. Now draw sticks (or balls). Divide them into groups to fit the division sentence.

a. $18 \div 3 =$ _____

b. $24 \div 2 =$ _____

c. $21 \div 3 =$ _____

d. $27 \div 9 =$ _____

e. $30 \div 10 =$ _____

f. $30 \div 3 =$ _____