






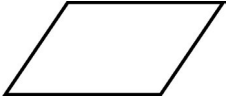
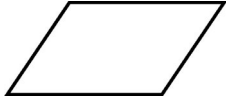


Divide Polygons

1. Draw line segments into the shape and divide it into other shapes!

 a. to a square and a rectangle	 b. to a triangle and a pentagon	 c. to three rectangles
 d. to two quadrilaterals that are not rectangles	 e. to two parts that are exactly the same shape	 f. to four triangles
 g. to four triangles	 h. to a triangle and a pentagon	 i. to four parallelograms

2. Divide the pentagon and hexagon in different shape parts using line segments. Write what kind of parts you got.

