







Euros, Part 2

<p>One euro.</p>  <p>€1 or €1.00</p>	<p>Two euros.</p>  <p>€2 or €2.00</p>	 <p>Five euros: €5 or €5.00.</p>	 <p>Ten euros: €10 or €10.00.</p>
<p>Write “€” symbol in front of euro amounts.</p> <p>Write first the euros, then a decimal point, and then the cents.</p>	 <p>€6.51</p>	 <p>€2.05</p>	

1. How much money is there? Write the amount in euros.

 <p>a. € _____</p>	 <p>b. € _____</p>
 <p>c. € _____</p>	 <p>d. € _____</p>
 <p>e. € _____</p>	 <p>f. € _____</p>