

Counting One, Two, and Five-Cent Coins



This coin is worth 1 cent (euro cent). We write 1 c.



This coin is worth two cents. We write 2 c.



This coin is worth five cents = 5 c.

In the exercises we use small pictures of these coins. Can you tell which is which?

Do not confuse these coins! They are all copper-colored. The five-cent coin is the largest of these three, and the two-cent coin is larger than the one-cent coin. To be sure, look at the number written on them.












Count up →

5 10 12 13 14 15

To find the total cent-value, add the cent-values. It's called counting up. Start counting with the coins of the largest value.

The total on the right is 15 cents.

1. Count and write the total amount in cents.

| | | |
|---|---|---|
| <p>a.  _____ c</p> | <p>b.  _____ c</p> | <p>c.  _____ c</p> |
| <p>d.  _____ c</p> | <p>e.  _____ c</p> | <p>f.  _____ c</p> |
| <p>g.  _____ c</p> | <p>h.  _____ c</p> | <p>i.  _____ c</p> |