

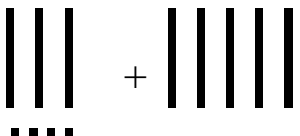

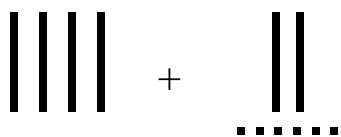
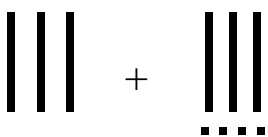
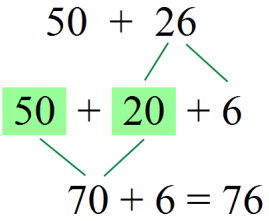
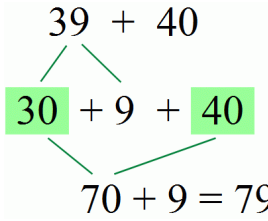


Adding with Whole Tens

1. The numbers are shown with ten-sticks and one-dots. Write the sums.

 <p>a. $54 + 10 = \underline{\quad}$</p>	 <p>b. $\underline{\quad} + 20 = \underline{\quad}$</p>
 <p>c. $\underline{\quad} + \underline{\quad} = \underline{\quad}$</p>	 <p>d. $\underline{\quad} + \underline{\quad} = \underline{\quad}$</p>
 <p>e. $\underline{\quad} + \underline{\quad} = \underline{\quad}$</p>	 <p>f. $\underline{\quad} + \underline{\quad} = \underline{\quad}$</p>

<p>Adding whole tens and another 2-digit number</p> <p>Break down the other number into tens and ones. Add the tens. Then, add the ones.</p>	$50 + 26$ 	$39 + 40$ 
---	--	---

2. Add. Break the second number into tens and ones first. Then add the tens.

<p>a. $10 + 34 = \underline{\quad}$ ($10 + 30 + 4$)</p>	<p>b. $10 + 28 = \underline{\quad}$ ($10 + \underline{\quad} + \underline{\quad}$)</p>	<p>c. $20 + 24 = \underline{\quad}$ ($20 + \underline{\quad} + \underline{\quad}$)</p>
<p>d. $30 + 21 = \underline{\quad}$</p>	<p>e. $50 + 17 = \underline{\quad}$</p>	<p>f. $40 + 33 = \underline{\quad}$</p>
<p>g. $60 + 23 = \underline{\quad}$</p>	<p>h. $30 + 37 = \underline{\quad}$</p>	<p>i. $70 + 25 = \underline{\quad}$</p>