
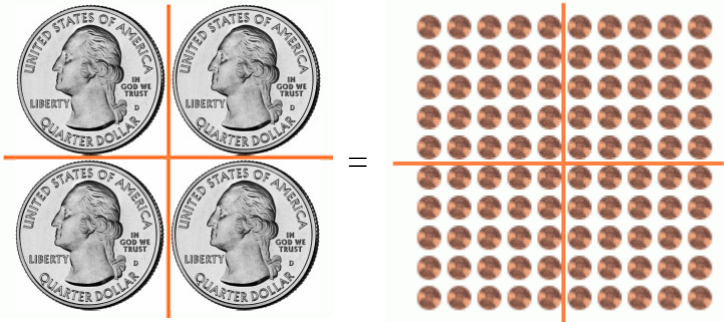



















# Quarters

 <p>One <b>quarter</b> is 25 cents.</p> <p>The word “quarter” means one-fourth. A quarter coin is one-fourth part of a <b>dollar</b>.</p> <p>One dollar is 100 cents, and is written \$1.</p>	 <p>4 quarters = 100¢ 1 dollar = 1 dollar = \$1</p>
 <p>Two quarters = 50¢.</p>	 <p>Three quarters = 75¢</p>
 <p>25¢</p>  <p>35, 45, 55 (count dimes by tens)</p>	 <p>56, 57¢</p> <p>Count the quarters first since they have the biggest cent-value.</p>













1. Quarters and dimes. Write the total amount in cents.

<p>a.</p> 	<p>b.</p> 	<p>c.</p> 
<p>d.</p> 	<p>e.</p> 	<p>f.</p> 
<p>g.</p> 	<p>h.</p> 	<p>i.</p> 

2. Quarters and nickels. Write the total amount in cents.

<p>a. </p>	<p>b. </p>	<p>c. </p>
---	---	---

3. How much money? Write down the amount in cents.

<p>a. </p>	<p>b. </p>
<p>c. </p>	<p>d. </p>
<p>e. </p>	<p>f. </p>
<p>g. </p>	<p>h. </p>
<p>i. </p>	<p>j. </p>
<p>k. </p>	<p>l. </p>

4. How much is the total if you have:



















a. two dimes and a quarter

b. two dimes, four nickels

c. a dime, a nickel, six pennies

d. two quarters, three dimes, seven pennies

5. Cross out the coins you need to buy the item. Write how many cents you have left.

<p>a.  39¢</p>  <p>Left _____¢</p>	<p>b.  88¢</p>  <p>Left _____¢</p>	<p>c.  54¢</p>  <p>Left _____¢</p>
<p>d.  61¢</p>  <p>Left _____¢</p>	<p>e.  97¢</p>  <p>Left _____¢</p>	<p>f.  81¢</p>  <p>Left _____¢</p>
<p>g.  73¢</p>  <p>Left _____¢</p>	<p>h.  45¢</p>  <p>Left _____¢</p>	<p>i.  26¢</p>  <p>Left _____¢</p>