










Money - counting dimes, nickels, and cents

| | |
|---|---|
|  <p>This coin is called one cent or one penny. We write 1 c or 1¢.</p> |  <p>This coin is called one dime. It is worth ten cents - 10c.</p> |
|  <p>Here you see two dimes - 10 cents and 10 cents - and four pennies. Total 24 cents.</p> | |

1. How much money? Write down the amount in cents.

| | | |
|--|--|--|
| <p>a.</p>  | <p>b.</p>  | <p>c.</p>  |
| <p>d.</p>  | <p>e.</p>  | <p>f.</p>  |

2. Use real money, or draw gray circles with "10" for dimes and orange circles with "1" for pennies.

| | | |
|--------|--------|--------|
| a. 62¢ | b. 40¢ | c. 24¢ |
| d. 77¢ | e. 54¢ | f. 30¢ |