







# Counting in groups of 10

When counting, we count in groups of TEN. Count ten dots, and encircle them. How many ten-groups do you get in each picture? How many ones are left over?

 <p>ten- groups    ones</p> <input type="text"/> <input type="text"/>	 <p>ten- groups    ones</p> <input type="text"/> <input type="text"/>	 <p>ten- groups    ones</p> <input type="text"/> <input type="text"/>
 <p>ten- groups    ones</p> <input type="text"/> <input type="text"/>	 <p>ten- groups    ones</p> <input type="text"/> <input type="text"/>	 <p>ten- groups    ones</p> <input type="text"/> <input type="text"/>