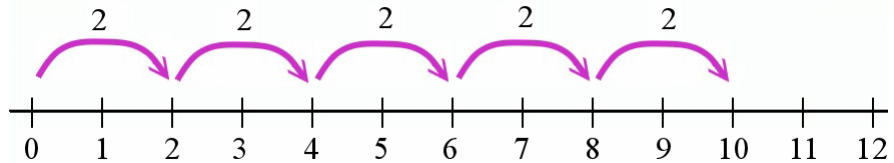


Multiplying on a Number Line

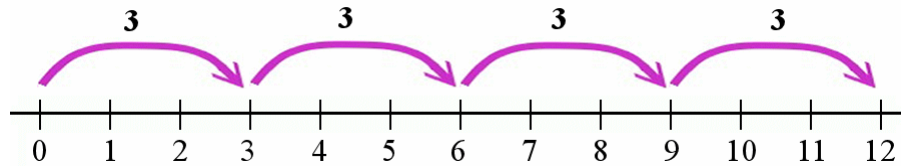
Five jumps, each jump is two steps.

$$5 \times 2 = 10.$$

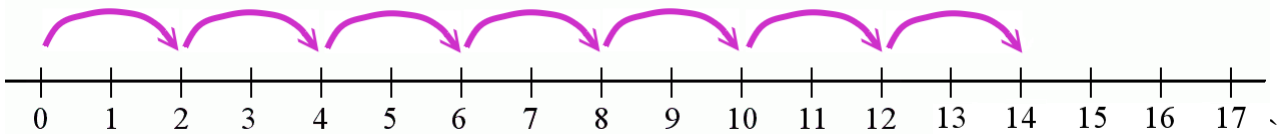


Four jumps, each jump is three steps.

$$4 \times 3 = 12.$$



1. Write the multiplication sentence that the jumps on the number line illustrate.



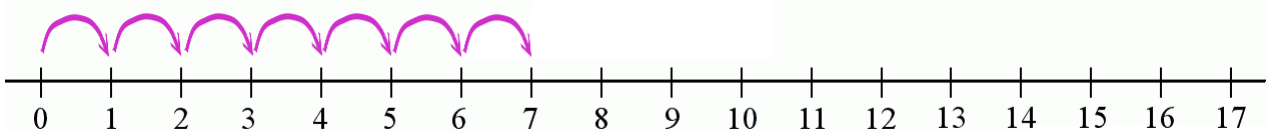
a.



b.



c.



d.