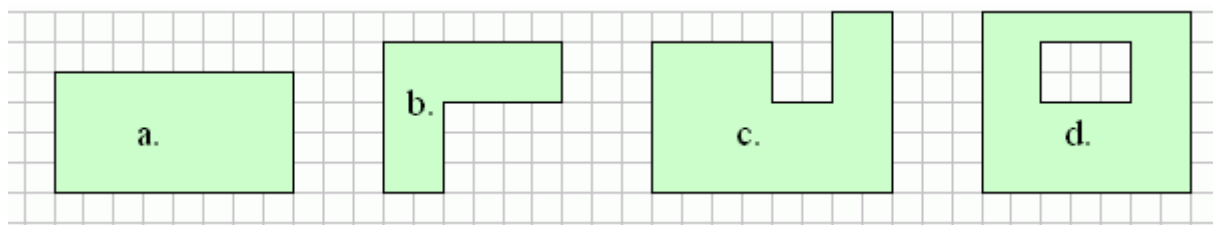


Name:

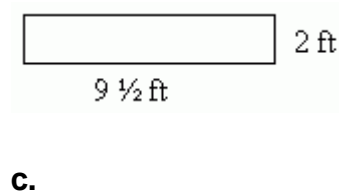
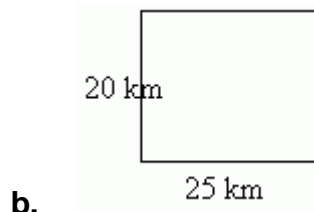
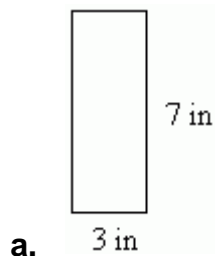
Date:

Area of Rectangles

1. How many square units is the area of these shaded shapes?



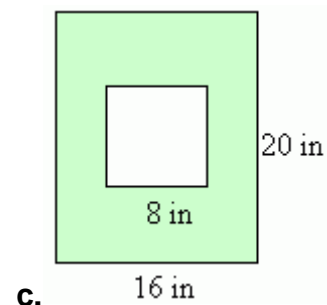
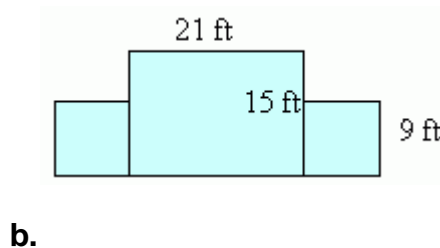
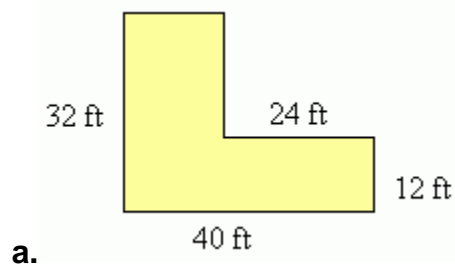
2. Find the areas of the rectangles when the sides are known.



3. Draw a figure.

a. A rectangle with area 20	b. A square with area 16	c. An L-shape with area 18

4. Find the areas.



5. The side of each little square is 3 cm. What is the area of the shaded rectangle?

