

## Word Problems and Patterns 4

1. Solve the problems. In which problem do you write a missing addend sentence?

a. You have saved \$19 to buy a Lego set that costs \$28.  
How much do you still need to save?

b. The neighbor offers to pay you two dollars to mow the lawn, so you do.  
How much do you still need?

c. Will you have enough if you mow the lawn a second time? A third time?

d. In a board game, you need to move 18 more squares to get to the end of the game. You roll 6 and 5 on two dice. Now how far do you need to go?

What kind of numbers on the two dice would get you to the end?











e. Ken has collected 34 stamps. Bill has collected 57 stamps. Brian has collected 94 stamps. If Ken and Bill combine their collections, will they together have more than Brian?











2. Subtract mentally.

a.  $15 - 9 = \underline{\quad}$       b.  $14 - 8 = \underline{\quad}$       c.  $13 - 7 = \underline{\quad}$       d.  $12 - 7 = \underline{\quad}$       e.  $15 - 6 = \underline{\quad}$

$45 - 9 = \underline{\quad}$        $34 - 8 = \underline{\quad}$        $53 - 7 = \underline{\quad}$        $72 - 7 = \underline{\quad}$        $65 - 6 = \underline{\quad}$

3. Figure out the patterns and continue them!

$+$	$+$	$+$	$+$	$+$	$+$	$+$	$+$	$+$	$+$
									
36	45	54	63	72	$\underline{\quad}$	$\underline{\quad}$	$\underline{\quad}$	$\underline{\quad}$	$\underline{\quad}$

$+$	$+$	$+$	$+$	$+$	$+$	$+$	$+$	$+$	$+$
									
32	40	49	57	66	$\underline{\quad}$	$\underline{\quad}$	$\underline{\quad}$	$\underline{\quad}$	$\underline{\quad}$