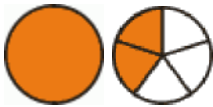
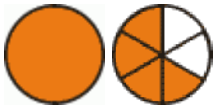
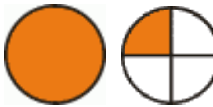

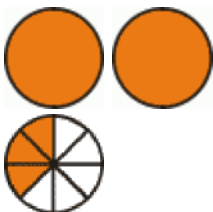
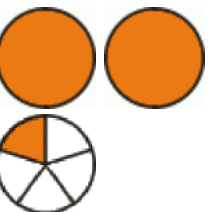
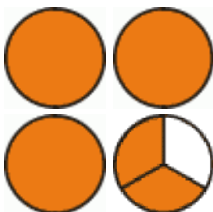
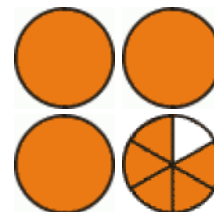


Name:

Date:

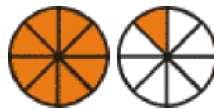
Mixed Numbers

1. Write what mixed numbers the pictures illustrate.

 a.	 b.	 c.	 d.
 e.	 f.	 g.	 h.

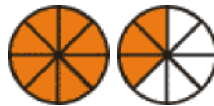
2. Find matching pairs.

$1 \frac{3}{4}$



$\frac{9}{4}$

$1 \frac{1}{8}$



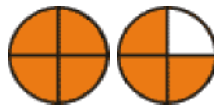
$\frac{7}{4}$

$2 \frac{1}{4}$



$\frac{11}{8}$

$1 \frac{3}{8}$



$\frac{9}{8}$

3. Draw pictures to illustrate these mixed numbers.

a. $1 \frac{1}{2}$	b. $2 \frac{2}{3}$	c. $2 \frac{3}{4}$
---------------------------	---------------------------	---------------------------