










Name:

Date:



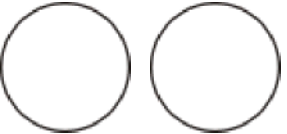
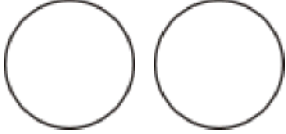


Compare Fractions

1. Draw the fraction and compare. Write $>$ or $<$ or $=$.

a.  $\frac{2}{3}$ $\frac{1}{3}$	b.  $\frac{1}{5}$ $\frac{4}{5}$	c.  $\frac{3}{6}$ $\frac{1}{6}$
d.  $\frac{6}{8}$ $\frac{7}{8}$	e.  $\frac{3}{8}$ $\frac{1}{8}$	f.  $\frac{4}{4}$ $\frac{2}{4}$
g.  $\frac{1}{9}$ $\frac{5}{9}$	h.  $\frac{5}{12}$ $\frac{3}{12}$	i.  $\frac{6}{10}$ $\frac{7}{10}$

What do you notice about comparing two fractions when the denominators are the same?

2. Draw the fractions and compare them. Write $>$ or $<$ or $=$.

a.  $\frac{1}{2}$ $\frac{1}{3}$	b.  $\frac{1}{5}$ $\frac{1}{8}$	c.  $\frac{1}{6}$ $\frac{1}{2}$
d.  $\frac{3}{6}$ $\frac{3}{8}$	e.  $\frac{2}{4}$ $\frac{2}{3}$	f.  $\frac{4}{8}$ $\frac{4}{5}$

What can you notice about comparing two fractions when the numerators are the same?
