

Name: \_\_\_\_\_

Date: \_\_\_\_\_

# Recognize Fractions

1. Write two fractions for each picture: the colored part and the white part.



a.



b.



c.



d.



e.



f.



g.



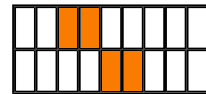
h.



i.



j.



k.

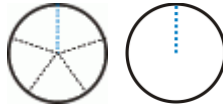


l.

## How to draw pie models



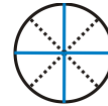
Thirds: draw lines at 12 o'clock, 4 o'clock, and 8 o'clock.



Fifths: First draw a line at 12 o'clock. Then draw as a man doing jumping jacks.




Sixths: First draw thirds, then split those




Eighths: First draw fourths, then split those.


2. Divide the circle into fractions and color the right amount the illustrate the fraction.




a.  $\frac{1}{2}$




b.  $\frac{2}{5}$




c.  $\frac{1}{6}$




d.  $\frac{3}{5}$




e.  $\frac{2}{3}$




f.  $\frac{1}{8}$




g.  $\frac{1}{4}$




h.  $\frac{6}{8}$




i.  $\frac{4}{5}$



j.  $\frac{3}{8}$



k.  $\frac{1}{3}$



l.  $\frac{4}{4}$