

4. Subtract. Draw a picture too.




a.  $4\frac{1}{3} - 2\frac{2}{3} =$




b.  $3\frac{2}{5} - 1\frac{4}{5} =$



c.  $4\frac{1}{4} - 2\frac{3}{4} =$



d.  $3\frac{2}{6} - \frac{5}{6} =$




e.  $3\frac{2}{8} - 1\frac{5}{8} =$



f.  $4\frac{1}{12} - 2\frac{5}{12} =$



g.  $4\frac{1}{4} - 2\frac{2}{4} =$



h.  $3\frac{5}{12} - 1\frac{11}{12} =$



i.  $7\frac{3}{8} - 2\frac{7}{8} - 1\frac{3}{8} =$



j.  $7\frac{1}{4} - 2\frac{3}{4} - 2\frac{3}{4} =$



k.  $6\frac{5}{12} - 2\frac{9}{12} - 2\frac{5}{12} =$