

Practicing Shopping

1. Make these amounts of money. You can use real money, or draw the coins.

a. 47 cents	b. 32 cents	c. 88 cents
-------------	-------------	-------------



2. You have:

Draw the coins you would use to pay for an item that costs:

a. 29 cents	b. 46 cents	c. 62 cents
d. 48 cents	e. 86 cents	f. 91 cents

3. Write the total amount in cents, if you have:

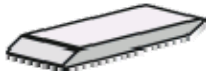

















a. two twenty-cent coins
and three five-cent coins

b. four ten-cent coins and
four five-cent coins

c. a 20-c coin, five 10-c coins
and six 2-c coins

d. three 20-c coins, three 5-c coins,
and three 2-c coins

4. Cross out the coins you need to buy the item. Write how many cents you have left.

<p>a.  39 c</p>  <p>Left _____ c</p>	<p>b.  88 c</p>  <p>Left _____ c</p>	<p>c.  54 c</p>  <p>Left _____ c</p>
<p>d.  61 c</p>  <p>Left _____ c</p>	<p>e.  97 c</p>  <p>Left _____ c</p>	<p>f.  81 c</p>  <p>Left _____ c</p>
<p>g.  73 c</p>  <p>Left _____ c</p>	<p>h.  45 c</p>  <p>Left _____ c</p>	<p>i.  26 c</p>  <p>Left _____ c</p>