

Counting One, Two, and Five-Cent Coins



This coin is worth 1 cent (euro cent). We write 1 c.



This coin is worth two cents. We write 2 c.



This coin is worth five cents = 5 c.

In the exercises we use small pictures of these coins. Can you tell which is which?

Do not confuse these coins! They are all copper-colored. The five-cent coin is the largest of these three, and the two-cent coin is larger than the one-cent coin. To be sure, look at the number written on them.























Count up →

5 10 12 13 14 15

To find the total cent-value, add the cent-values. It's called counting up. Start counting with the coins of the largest value.

The total on the right is 15 cents.

1. Count and write the total amount in cents.

<p>a.   _____ c</p>	<p>b.   _____ c</p>	<p>c.   _____ c</p>
<p>d.   _____ c</p>	<p>e.   _____ c</p>	<p>f.   _____ c</p>
<p>g.   _____ c</p>	<p>h.    _____ c</p>	<p>i.    _____ c</p>