

Whole and Half Hours

In this lesson, the clock only has one hand - the HOUR hand.



The hour hand points to four - it is four o'clock, or "four hours".

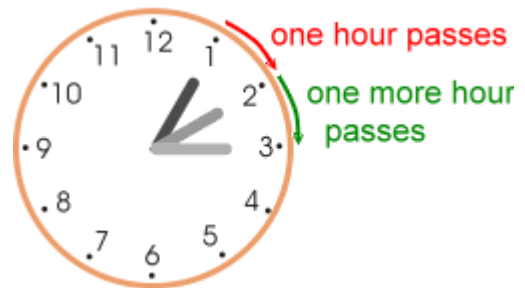


The hour hand points to eleven - it is eleven o'clock, or "eleven hours".

The hour hand slowly moves around the clock face: from 1 to 2 to 3, and so on.

When the hour hand moves from 1 to 2, exactly one hour of time has passed.

The same is true when the hour hand moves from 2 to 3. It takes the hour-hand one hour to do that.



On this clock, the hour hand has first pointed to 5 - it was five o'clock.

Then it has moved **halfway** between 5 and 6. We say it is **half past five**.





It takes the hour hand one-half hour to move from five to halfway between five and six.

The hour hand has moved past eight o'clock, and is halfway between 8 and 9. We say it is half past eight.

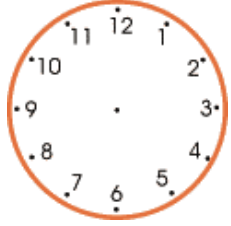
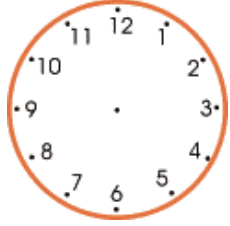
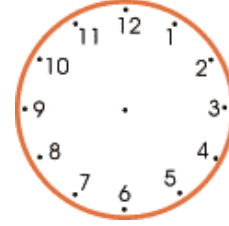
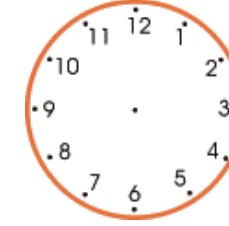
In half an hour, it will be nine o'clock.







1. Write the time under each clock face.

| | | | |
|---|---|--|---|
|  <p>a. _____ o'clock</p> |  <p>b. _____ o'clock</p> |  <p>c. _____ o'clock</p> |  <p>d. _____ o'clock</p> |
|---|---|--|---|

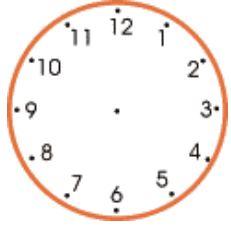
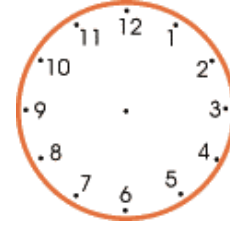
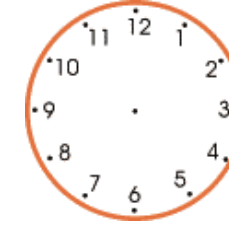
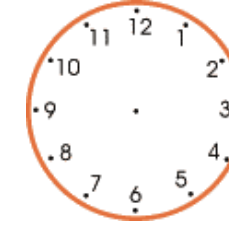
2. Draw the hour hand.

| | | | |
|--|---|---|---|
|  <p>a. five o'clock</p> |  <p>b. eight o'clock</p> |  <p>c. twelve o'clock</p> |  <p>d. seven o'clock</p> |
|--|---|---|---|









3. Write the time.

| | | | |
|---|---|--|---|
|  <p>a. half past _____</p> |  <p>b. half past _____</p> |  <p>c. half past _____</p> |  <p>d. half past _____</p> |
|---|---|--|---|

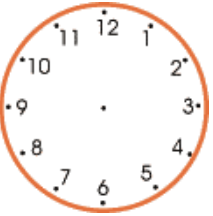
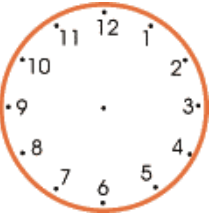
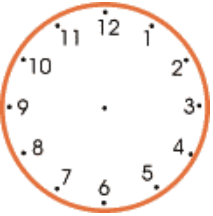
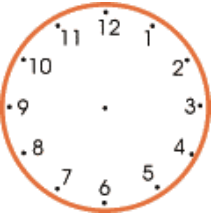
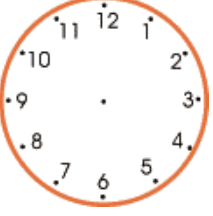
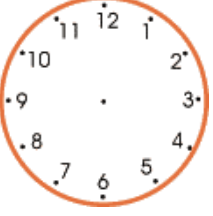
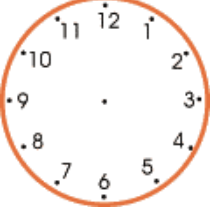
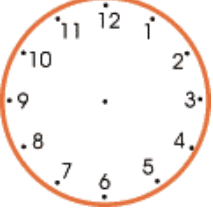
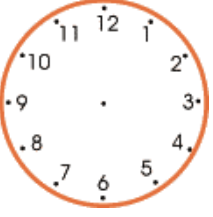
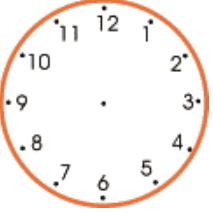

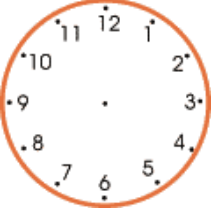
4. Draw the hour hand.

| | | | |
|---|---|--|--|
|  <p>a. half past six</p> |  <p>b. half past three</p> |  <p>c. half past two</p> |  <p>d. half past four</p> |
|---|---|--|--|

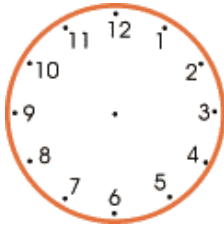
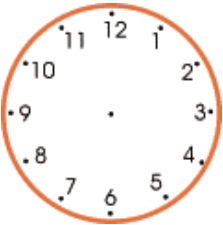
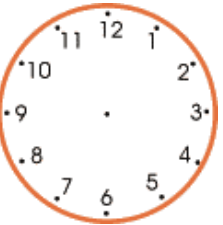
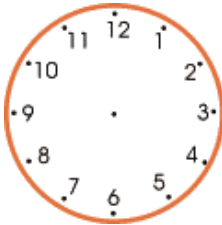
5. Write the time yourself!

| | | | |
|--|--|---|--|
|  <p>a. _____</p> <p>_____</p> |  <p>b. _____</p> <p>_____</p> |  <p>c. _____</p> <p>_____</p> |  <p>d. _____</p> <p>_____</p> |
|  <p>e. _____</p> <p>_____</p> |  <p>f. _____</p> <p>_____</p> |  <p>g. _____</p> <p>_____</p> |  <p>h. _____</p> <p>_____</p> |





6. Draw the hour hands on the clocks. On the second row, show the time a half-hour later. On the third row, show the time another half-hour later (compared to the second row).

| | | | | |
|----------------------------------|--|---|--|---|
| <p>Draw the hour hand.</p> |  <p>a. Five o'clock</p> |  <p>b. One o'clock</p> |  <p>c. Half-past six</p> |  <p>d. Half-past three</p> |
| <p>A half-hour later →</p> |  |  |  |  |
| <p>Another half-hour later →</p> |  |  |  |  |

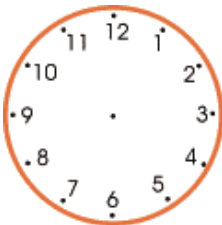
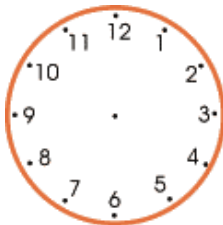
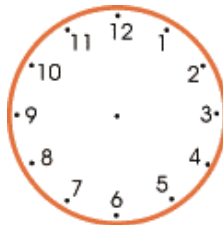
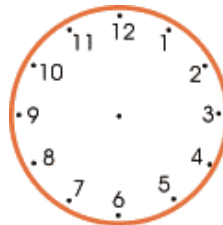
7. Draw the hour hand on the clocks. Then write the time that the clock shows a half-hour later.

| | | | | |
|------------------|---|---|--|---|
| |  |  |  |  |
| | a. three o'clock | b. eleven o'clock | c. half-past five | d. half-past eleven |
| 1/2 hour later → | half past _____ | half past _____ | _____ o'clock | _____ o'clock |

8. Write the time that the clock shows. Then write the time an hour later.

| | | | | |
|-----------------|---|---|--|---|
| |  |  |  |  |
| | a. _____ o'clock | b. _____ o'clock | c. half past _____ | d. half past _____ |
| An hour later → | _____ _____ | _____ _____ | _____ _____ | _____ _____ |

9. Draw the hour hand on the clock face. Write what time it would be an hour later.

| | | | | |
|-----------------|---|---|--|---|
| |  |  |  |  |
| | a. three o'clock | b. eleven o'clock | c. half-past five | d. half-past eleven |
| An hour later → | _____ _____ | _____ _____ | _____ _____ | _____ _____ |