







How Much Time Passes?

1. How many minutes till 2:30? Till 8:05?

<p style="text-align: center;">a.</p> <p>It is 2:00. → _____ minutes till</p> <p>It is 2:10. → _____ minutes till</p> <p>It is 2:20. → _____ minutes till</p> <p>It is 2:25. → _____ minutes till</p> <div style="text-align: center;">  <p>2:30</p> </div>	<p style="text-align: center;">b.</p> <p>It is 7:30. → _____ minutes till</p> <p>It is 7:35. → _____ minutes till</p> <p>It is 7:45. → _____ minutes till</p> <p>It is 7:50. → _____ minutes till</p> <div style="text-align: center;">  <p>8:05</p> </div>
--	--

2. The class ends at 1:00. How many minutes of class is left at these times?

 <p>a.</p> <p>_____ minutes</p>	 <p>b.</p> <p>_____ minutes</p>	 <p>c.</p> <p>_____ minutes</p>	 <p>d.</p> <p>_____ minutes</p>
---	---	--	---

3. How many minutes pass? Imagine turning the minute hand on a clock.

from	1:45	1:55	1:40	1:45	1:55
to	1:55	2:05	2:05	2:15	2:10
minutes	<u>10 minutes</u>				

from	2:00	7:05	8:45	6:40	11:15
to	2:35	7:15	9:05	7:10	11:30
minutes					

4. a. The bus trip started at 10 past 4, and ended at half past 4. How many minutes did it take?

b. Joshua started math homework at 20 till 5, and ended at 5 past 5.

How much time did he spend?

c. Music class starts at 10:15, and ends at 10:45. How long is it?