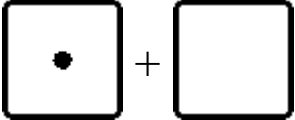
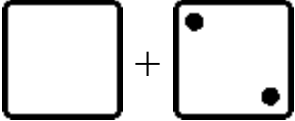
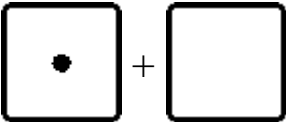
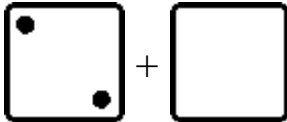
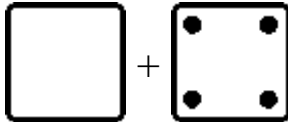
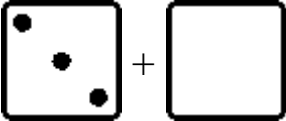
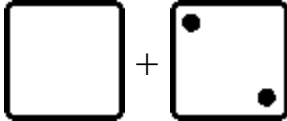
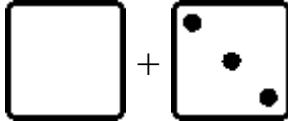
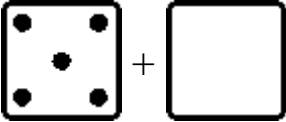
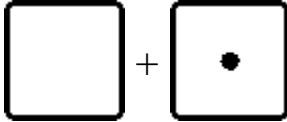
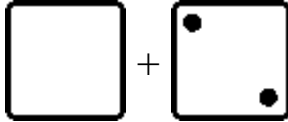


## Missing Items

<p>Something is missing from the addition. The TOTAL is not missing. We know the total.</p> <p>How many are in the second group? That's what is missing!</p> <p>There should be 5 dots in total. Draw 4 in the second die face.</p>	<div style="margin-bottom: 5px;"><b>5</b></div>  <p>1 + _____</p>
<p>There should be 4 dots in total. The second die face has two. There are none in the first die face, so you need to draw them.</p> <p>Read: "2 plus what number makes 4?" or, "2 and how many more makes 4?" or, "What number and 2 makes 4?"</p>	<div style="margin-bottom: 5px;"><b>4</b></div>  <p>_____ + 2</p>

1. Draw more dots. Write the missing number.

<div style="margin-bottom: 5px;"><b>3</b></div>  <p>a. 1 + _____</p>	<div style="margin-bottom: 5px;"><b>3</b></div>  <p>b. 2 + _____</p>	<div style="margin-bottom: 5px;"><b>5</b></div>  <p>c. _____ + 4</p>
<div style="margin-bottom: 5px;"><b>5</b></div>  <p>d. 3 + _____</p>	<div style="margin-bottom: 5px;"><b>5</b></div>  <p>e. _____ + 2</p>	<div style="margin-bottom: 5px;"><b>4</b></div>  <p>f. _____ + 3</p>
<div style="margin-bottom: 5px;"><b>5</b></div>  <p>g. 5 + _____</p>	<div style="margin-bottom: 5px;"><b>4</b></div>  <p>h. _____ + 1</p>	<div style="margin-bottom: 5px;"><b>4</b></div>  <p>i. _____ + 2</p>