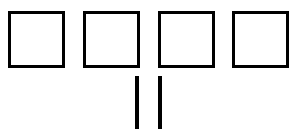


1. Fill in. Draw squares, sticks and dots. Break down the minuend (the number you subtract from) as needed. Cross out what is subtracted.

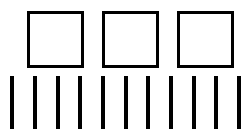
a. Cross out 90

First break one hundred down into 10 tens.



410

→



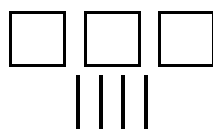
→ 3 hundreds 11 tens

BORROW
one hundred.

$$\begin{array}{r} 410 \\ - 90 \\ \hline \end{array}$$

b. Cross out 170

First break one hundred down into 10 tens.



340

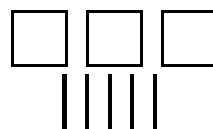
→

→ ___ hundreds ___ tens

BORROW
one hundred.

$$\begin{array}{r} 340 \\ - 170 \\ \hline \end{array}$$

c. Cross out 280



350

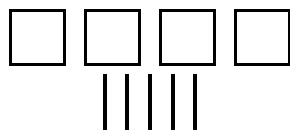
→

→ ___ hundreds ___ tens

BORROW
one hundred.

$$\begin{array}{r} 350 \\ - 280 \\ \hline \end{array}$$

d. Cross out 286



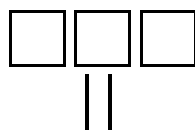
457

→

→ ___ hundreds ___ tens ___ ones

$$\begin{array}{r} 457 \\ - 286 \\ \hline \end{array}$$

e. Cross out 164



326

→

→ ___ hundreds ___ tens ___ ones

$$\begin{array}{r} 326 \\ - 164 \\ \hline \end{array}$$