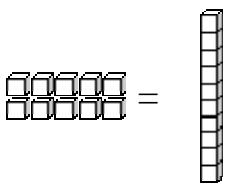


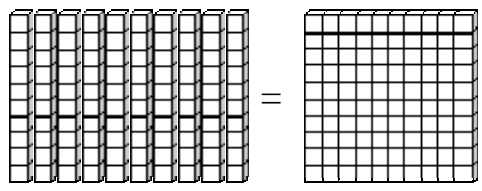
Add and Subtract Whole Hundreds

Ten ones make a ten-pillar:




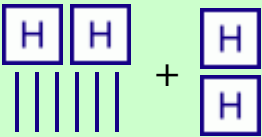
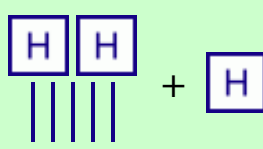
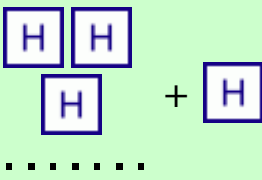
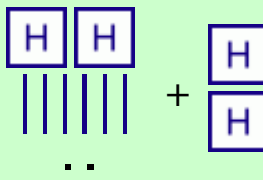
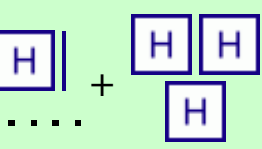
ten ones = 10

Ten ten-pillars make ONE HUNDRED:



ten tens = 100

1. A dot is one, a stick is a ten, and a square is a hundred. Write the addition sentences. Add in columns as well. Hundreds will go in their own column!

 $200 + 100 = 300$	 $260 + \underline{\quad\quad\quad} = \underline{\quad\quad\quad}$
 $\underline{\quad\quad\quad} + \underline{\quad\quad\quad} = \underline{\quad\quad\quad}$	 $307 + \underline{\quad\quad\quad} = \underline{\quad\quad\quad}$
 $\underline{\quad\quad\quad} + \underline{\quad\quad\quad} = \underline{\quad\quad\quad}$	 $\underline{\quad\quad\quad} + \underline{\quad\quad\quad} = \underline{\quad\quad\quad}$