
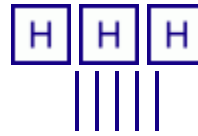


2. Cross out as many hundreds as the problem indicates. Do the problems in columns as well.



| | H | T | O |
|---|---|---|---|
| | 4 | 0 | 0 |
| - | 1 | 0 | 0 |
| | | | |

a. $400 - 100 = \underline{\quad}$



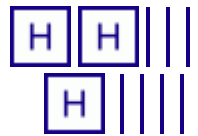
| | H | T | O |
|---|---|---|---|
| | | | |
| - | | | |
| | | | |

b. $350 - 100 = \underline{\quad}$



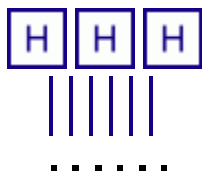
| | H | T | O |
|---|---|---|---|
| | | | |
| - | | | |
| | | | |

c. $140 - 100 = \underline{\quad}$



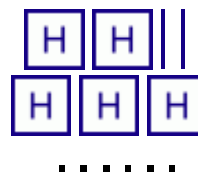
| | H | T | O |
|---|---|---|---|
| | | | |
| - | | | |
| | | | |

d. $\underline{\quad} - 200 = \underline{\quad}$



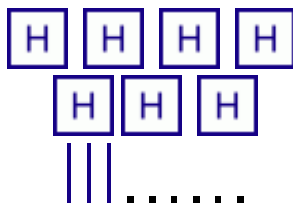
| | H | T | O |
|---|---|---|---|
| | | | |
| - | | | |
| | | | |

e. $\underline{\quad} - 100 = \underline{\quad}$



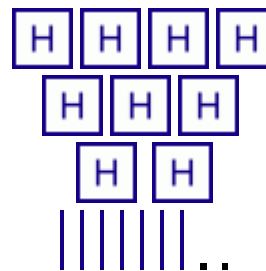
| | H | T | O |
|---|---|---|---|
| | | | |
| - | | | |
| | | | |

f. $\underline{\quad} - 200 = \underline{\quad}$



| | H | T | O |
|---|---|---|---|
| | | | |
| - | | | |
| | | | |

g. $\underline{\quad} - 500 = \underline{\quad}$



| | H | T | O |
|---|---|---|---|
| | | | |
| - | | | |
| | | | |

h. $\underline{\quad} - 400 = \underline{\quad}$

Only the _____ digit changes in the answer.