




3. How much is it total if you have...

a. two dimes and a quarter	b. two dimes, four nickels	c. a dime, a nickel, six pennies
d. two quarters, three dimes, seven pennies	e. three quarters, a dime, six pennies	f. seven dimes, a quarter, seven pennies
g. two quarters, a dime, a nickel	h. three quarters, two nickels, four pennies	i. a quarter, three dimes, 17 pennies

- **One quarter** - ___ cents. Use it when the money amount is between 25 and 50 cents.
Example: to make 31 cents, take one quarter, one nickel, and one penny.
- **Two quarters** - ___ cents. Use this when the money amount is between 50 and 75 cents.
To make 44 cents, take one quarter, one dime, one nickel, and four pennies.
- **Three quarters** - ___ cents. Use when the money amount is between 75 and 100 cents.
To make 87 cents, use three quarters, one dime, and two pennies.
- **Four quarters** - 100 cents or one dollar.

4. Which coins would you use to pay for an item that costs...

<p>You have:</p> 	a. 29¢	b. 31¢	c. 46¢
<p>You have:</p> 	d. 48¢	e. 52¢	f. 62¢
<p>You have:</p> 	g. 77¢	h. 86¢	i. 91¢