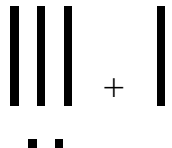








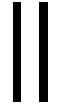








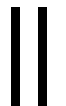



Adding Tens

1. Adding a ten or many tens is easy. Fill in.

<p>a.  + </p> <p>..</p> <p>32 + 10 = 42</p>	<p>b.  + </p> <p>....</p> <p>54 + 10 = 64</p>
<p>c.  + </p> <p>.....</p> <p>__ + 10 = __</p>	<p>d.  + </p> <p>.....</p> <p>__ + 10 = __</p>
<p>e.  + </p> <p>..</p> <p>+ =</p>	<p>f.  + </p> <p>....</p> <p>+ =</p>
<p>g.  + </p> <p>.....</p> <p>__ + 30 = __</p>	<p>h.  + </p> <p>.....</p> <p>__ + __ = __</p>
<p>i.  + </p> <p>....</p> <p>__ + __ = __</p>	<p>j.  + </p> <p>....</p> <p>__ + __ = __</p>
<p>The _____ digit does not change.</p>	

2. Add.

a. $23 + 10 = \underline{\quad}$ $23 + 20 = \underline{\quad}$	b. $45 + 20 = \underline{\quad}$ $45 + 30 = \underline{\quad}$	c. $16 + 10 = \underline{\quad}$ $16 + 30 = \underline{\quad}$	d. $37 + 30 = \underline{\quad}$ $37 + 20 = \underline{\quad}$
e. $77 + 10 = \underline{\quad}$ $77 + 20 = \underline{\quad}$	f. $18 + 50 = \underline{\quad}$ $18 + 40 = \underline{\quad}$	g. $31 + 20 = \underline{\quad}$ $31 + 50 = \underline{\quad}$	h. $47 + 40 = \underline{\quad}$ $47 + 20 = \underline{\quad}$
i. $12 + 60 = \underline{\quad}$ $12 + 80 = \underline{\quad}$	j. $24 + 70 = \underline{\quad}$ $24 + 40 = \underline{\quad}$	k. $34 + 20 = \underline{\quad}$ $34 + 10 = \underline{\quad}$	l. $27 + 50 = \underline{\quad}$ $27 + 30 = \underline{\quad}$

3. Break the second number to tens and ones, then add.

a. $10 + 34$ $10 + 30 + 4 = \underline{\quad}$	b. $10 + 28$ $10 + \underline{\quad} + \underline{\quad} =$	c. $20 + 24$ $20 + \underline{\quad} + \underline{\quad} =$	d. $30 + 21$ $30 + \underline{\quad} + \underline{\quad} =$
e. $50 + 17$ $50 + \underline{\quad} + \underline{\quad} =$	f. $40 + 33$ $40 + \underline{\quad} + \underline{\quad} =$	g. $20 + 19$ $20 + \underline{\quad} + \underline{\quad} =$	h. $30 + 37$ $30 + \underline{\quad} + \underline{\quad} =$
i. $70 + 14$	j. $60 + 23$	k. $40 + 51$	l. $20 + 65$

4. Find how many tens were added.

a. $10 + \underline{\quad} = 60$ $30 + \underline{\quad} = 50$ $10 + \underline{\quad} = 90$ $60 + \underline{\quad} = 100$	b. $12 + \underline{\quad} = 22$ $12 + \underline{\quad} = 52$ $12 + \underline{\quad} = 42$ $12 + \underline{\quad} = 82$	c. $45 + \underline{\quad} = 65$ $45 + \underline{\quad} = 55$ $45 + \underline{\quad} = 75$ $45 + \underline{\quad} = 95$	d. $23 + \underline{\quad} = 63$ $23 + \underline{\quad} = 53$ $23 + \underline{\quad} = 93$ $23 + \underline{\quad} = 33$
--	---	---	---